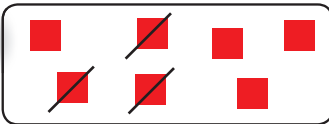



# Déduire combien ?

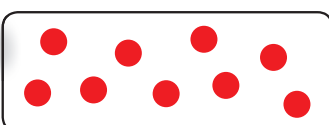


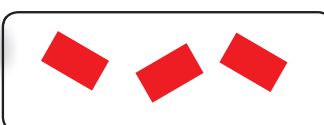
## 1. Barre et calcule.

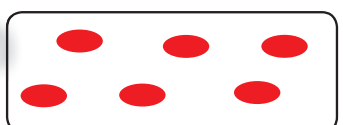
a)   
 $7 - 3 = 4$

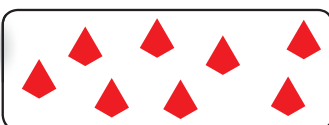
b)   
 $5 - \square = 2$

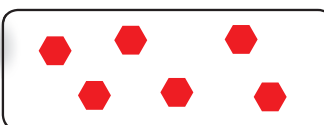
c)   
 $9 - \square = 5$


d)   
 $9 - \square = 3$


e)   
 $3 - \square = 0$


f)   
 $6 - \square = 3$

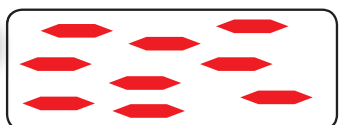
g)   
 $8 - \square = 4$

h)   
 $6 - \square = 1$

i)   
 $2 - \square = 0$

j)   
 $4 - \square = 3$

k)   
 $7 - \square = 2$

l)   
 $9 - \square = 2$

## 2. Complète les chiffres manquants.

a)  $5 - \square = 2$

f)  $8 - \square = 3$

k)  $1 - \square = 0$

p)  $8 - \square = 5$

b)  $9 - \square = 7$

g)  $3 - \square = 2$

l)  $5 - \square = 3$

q)  $5 - \square = 4$

c)  $2 - \square = 0$

h)  $4 - \square = 2$

m)  $7 - \square = 6$

r)  $6 - \square = 3$

d)  $6 - \square = 2$

i)  $7 - \square = 3$

n)  $9 - \square = 5$

s)  $9 - \square = 6$

e)  $4 - \square = 3$

j)  $9 - \square = 3$

o)  $3 - \square = 3$

t)  $7 - \square = 1$