


La QUANTITE

de 6

Réfléchis à une opération pour chaque fleur !




$$\square + \square = \square$$



$$\square + \square = \square$$




$$\square + \square = \square$$



$$\square - \square = \square$$


$$\square - \square = \square$$



$$\square - \square = \square$$



$$\square - \square = \square$$



$$\square + \square = \square$$



$$\square + \square = \square$$