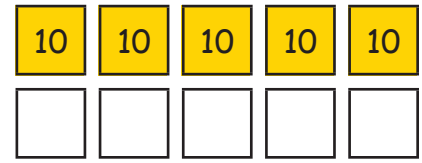
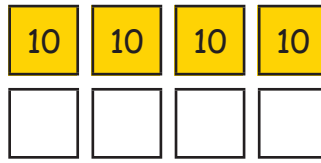
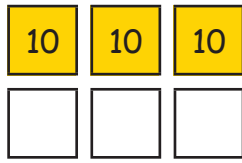



Reconnaître les doubles

1. Calcule le double :



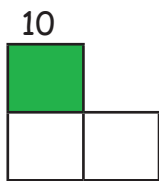
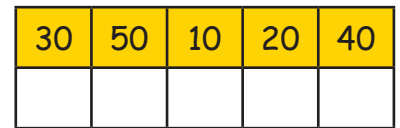
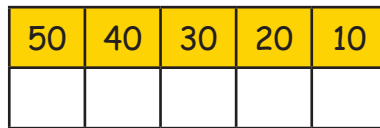
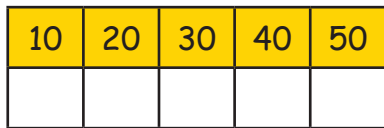
20 + 20 = ___

30 + 30 = ___

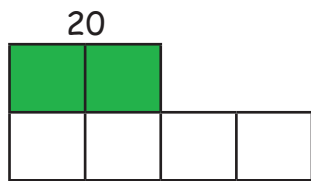
40 + 40 = ___

50 + 50 = ___

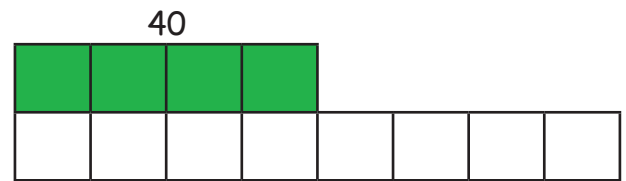
2. Forme les doubles :



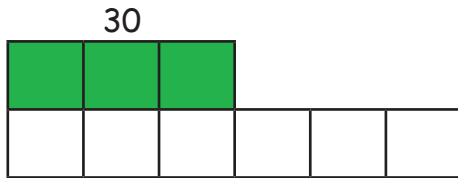
10 x 2 = ___



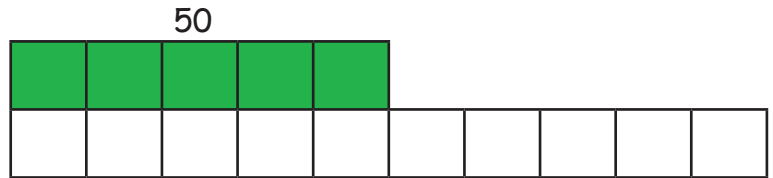
20 x 2 = ___



40 x 2 = ___



30 x 2 = ___



50 x 2 = ___

3. Calcule les pièces et complète le double :

