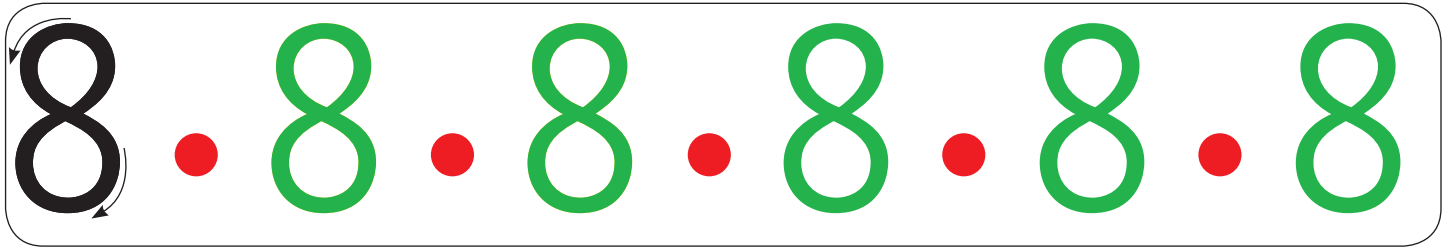




## Ecrire le chiffre 8

### 1. Complète la ligne :



### 2. Compte les éléments et inscris le chiffre dans la case :



### 3. Complète les chiffres manquants :

1	2	3	4	5
---	---	---	---	---

3	4	5	6	7
---	---	---	---	---

4	5	6	7	8
---	---	---	---	---

0	1	2	3	4
---	---	---	---	---

8	7	6	5	4
---	---	---	---	---

2	3	4	5	6
---	---	---	---	---

4	3	2	1	0
---	---	---	---	---

5	4	3	2	1
---	---	---	---	---

6	5	4	3	2
---	---	---	---	---