

Les chiffres jusqu'à 30

1. Classer les chiffres :

Classe dans le bon ordre les chiffres ci-dessous en commençant par le plus petit.

1	14	23	6	18	3	29	17	4	12	25	16	19	5	30
---	----	----	---	----	---	----	----	---	----	----	----	----	---	----

1	3	4	5	6	12	14	16	17	18	19	23	25	29	30
---	---	---	---	---	----	----	----	----	----	----	----	----	----	----

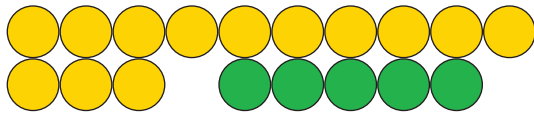
2. Que remarques-tu ?



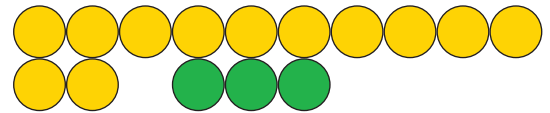
3	+	5	=	8
---	---	---	---	---



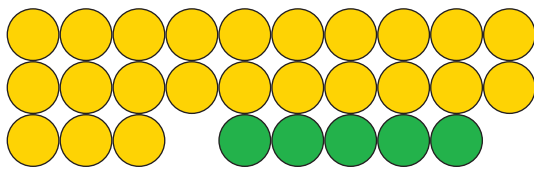
2	+	3	=	5
---	---	---	---	---



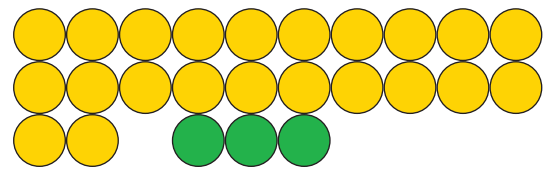
13	+	5	=	18
----	---	---	---	----



12	+	3	=	15
----	---	---	---	----



23	+	5	=	28
----	---	---	---	----



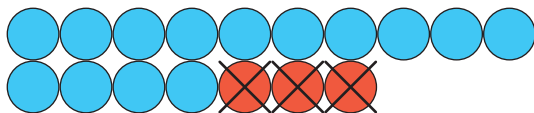
22	+	3	=	25
----	---	---	---	----



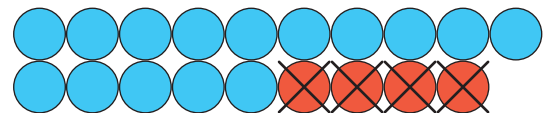
7	-	3	=	4
---	---	---	---	---



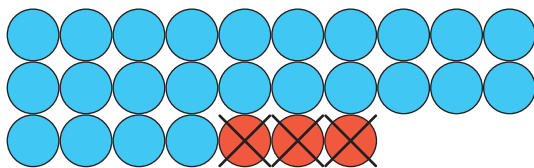
9	-	4	=	5
---	---	---	---	---



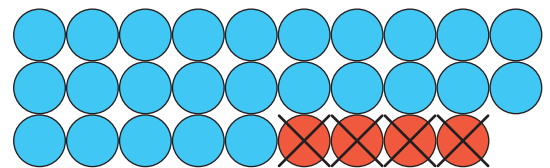
17	-	3	=	14
----	---	---	---	----



19	-	4	=	15
----	---	---	---	----



27	-	3	=	24
----	---	---	---	----



29	-	4	=	25
----	---	---	---	----