


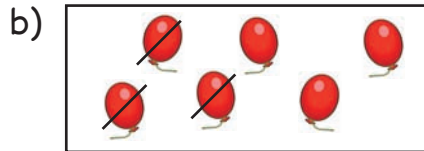
NIMM WEG



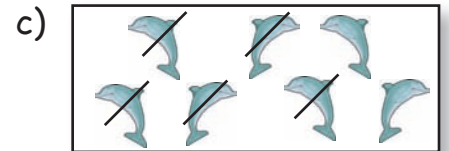
1. Rechne und setze die fehlenden Zahlen ein.



$$9 - 4 = \boxed{5}$$




$$6 - 3 = \boxed{3}$$



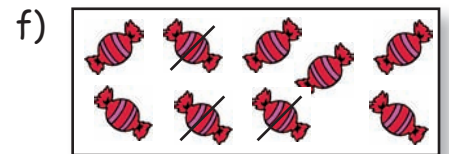
$$7 - 5 = \boxed{2}$$




$$5 - \boxed{2} = \boxed{3}$$



$$7 - \boxed{6} = \boxed{1}$$




$$9 - \boxed{3} = \boxed{6}$$



$$8 - \boxed{3} = \boxed{5}$$




$$3 - \boxed{1} = \boxed{2}$$

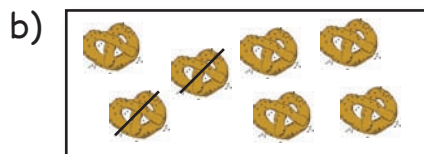


$$4 - \boxed{2} = \boxed{2}$$


2. Ergänze jetzt die fehlenden Rechnungen.



$$6 - 2 = 4$$



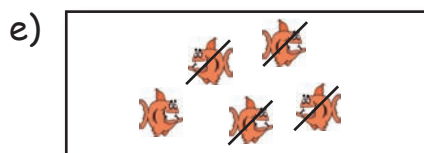
$$7 - 2 = 5$$



$$2 - 1 = 1$$




$$9 - 1 = 8$$



$$5 - 4 = 1$$




$$8 - 0 = 8$$



$$6 - 1 = 5$$



$$8 - 5 = 3$$



$$3 - 3 = 0$$