





Ecrire le chiffre 8

1. Complète la ligne :



2. Compte les éléments et inscris le chiffre dans la case :



3. Complète les chiffres manquants :

1			4	
---	--	--	---	--

		5	6	
--	--	---	---	--

4		6		
---	--	---	--	--

0				4
---	--	--	--	---

	7		5	
--	---	--	---	--

2	3			
---	---	--	--	--

		2	1	
--	--	---	---	--

5				1
---	--	--	--	---

	5			2
--	---	--	--	---